

# Calculando



Resolva as adições abaixo:

$5+6=$

$2+1=$

$7+1=$

$3+2=$

$8+8=$

$6+6=$

$6+5=$

$9+1=$

$9+4=$

$5+5=$

$4+1=$

$4+6=$

$9+5=$

$3+8=$

$9+9=$

$7+9=$

$6+4=$

$2+5=$

$5+7=$

$4+9=$


$8+4=$

$9+3=$


$3+6=$

$9+4=$


CONTE QUANTAS FIGURAS TEM EM CADA CONJUNTO E PINTE O QUADRADINHO COM O NÚMERO CORRESPONDENTE.




9	7
6	5



6	3
5	4



2	5
4	3



7	6
3	2