

Calculando



Resolva as adições abaixo:

$5 + 6 = \square$

$2 + 1 = \square$

$7 + 1 = \square$

$3 + 2 = \square$

$8 + 8 = \square$

$6 + 6 = \square$

$6 + 5 = \square$

$9 + 1 = \square$

$9 + 4 = \square$

$5 + 5 = \square$

$4 + 1 = \square$

$4 + 6 = \square$

$9 + 5 = \square$

$3 + 8 = \square$

$9 + 9 = \square$

$7 + 9 = \square$

$6 + 4 = \square$

$2 + 5 = \square$

$5 + 7 = \square$

$4 + 9 = \square$


$8 + 4 = \square$

$9 + 3 = \square$


$3 + 6 = \square$

$9 + 4 = \square$


CONTE QUANTAS FIGURAS TEM EM CADA CONJUNTO E PINTE O QUADRADINHO COM O NÚMERO CORRESPONDENTE.




9	7
6	5



6	3
5	4



2	5
4	3



7	6
3	2