



Centro Educacional Líbano Brasileiro

1ª Ano do Ensino Fundamental - Classe de Alfabetização

Professora: Rafaela Sampaio

Disciplina: Matemática

Sinais Matemáticos

Igual e Diferente




SINAL	SIGNIFICADO
=	IGUAL




SINAL	SIGNIFICADO
≠	DIFERENTE

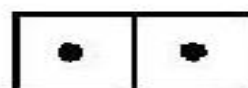
CONTE OS DOMINÓ, ESCREVA AS QUANTIDADE DE BOLINHAS E USE O SINAL = OU ≠.



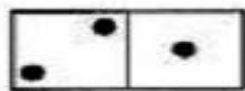
_



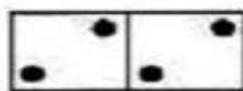
_



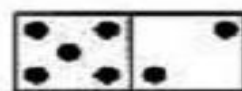
_



_



_



_

COMPARE OS NUMERAIS E USE O SINAL = OU ≠.

3 _ 3

2 _ 8

1 _ 1


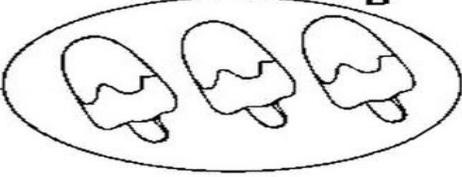
1 _ 0



10 _ 10



9 _ 9

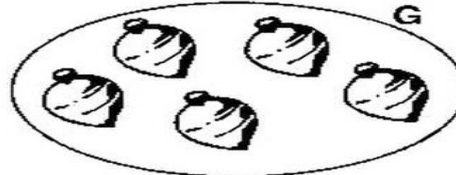

Coloque o numeral correspondente ao lado de cada conjunto.



Escreva o sinal correto:

A  2 \neq 3 

C  

E  

G  

I  

5

4

8

6

9

2

+4

+3

+5

+4

+3

+1

Capriche amor!!!