



Centro Educacional Libano Brasileiro

2ª Ano de Ensino Fundamental – Turma: 302

Professora: Maria Cristina

Disciplina: Matemática

1- Leia os números e escreva por extenso:

a) 48 - _____

b) 76- _____

2- Complete a sequência:

a) 82 - ____ - 86 - 88 - ____ - ____ - ____ - ____ - ____

b) 70 - 75 - 80 - ____ - ____ - ____ - ____

3- Utilizando os números das fichas, complete:

2 - 12 - 10 - 1 - 9

a) $99 + \underline{\quad} = 100$

b) $90 + \underline{\quad} = 100$

c) $88 + \underline{\quad} = 100$

d) $91 + \underline{\quad} = 100$

4- Coloque os algarismos na ordem crescente:

44 - 0 - 99 - 16 - 98

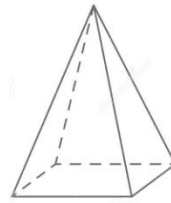
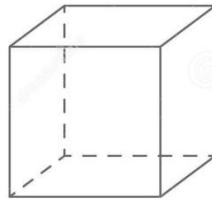
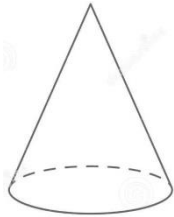
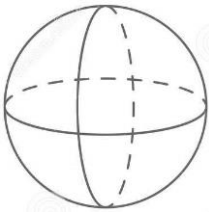
5- Calcule:

a) $6 + 3 = \underline{\hspace{2cm}}$ $\times 2 = \underline{\hspace{2cm}}$ $+ 5 = \underline{\hspace{2cm}}$

b) $7 \times 2 = \underline{\hspace{2cm}}$ $+ 10 = \underline{\hspace{2cm}}$ $- 3 = \underline{\hspace{2cm}}$

c) $25 - 20 = \underline{\hspace{2cm}}$ $\times 3 = \underline{\hspace{2cm}}$ $+ 10 = \underline{\hspace{2cm}}$

6- Escreva o nome das figuras geométricas.





Faça com Atenção!